

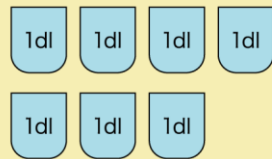
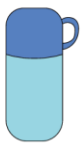
## 6

## 水のかさ (L dL mL)

L (リットル) と dL (デシリットル)  
のきそ (基本)

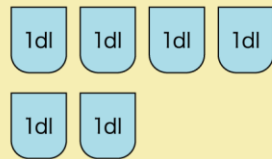
1 それぞれ 何 dL の水が入っていますか。

①



( ) dL

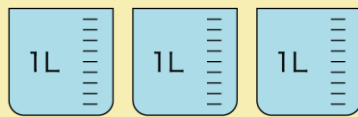
②



( ) dL

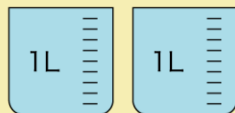
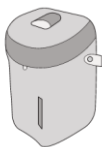
2 それぞれ 何 L の水が入っていますか。

①



( ) L

②



( ) L

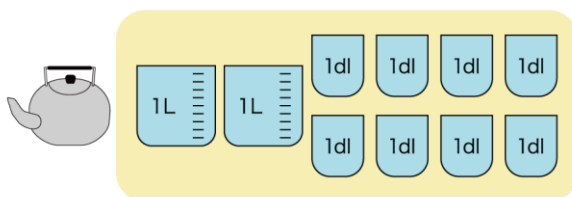


名前

月 日

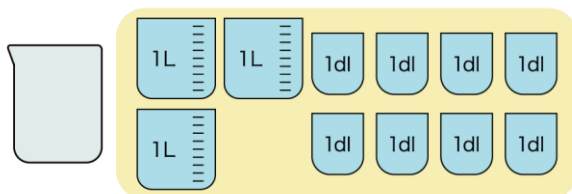
3 つぎの 水のかさを、それぞれのあらわし方で書きましょう。

①



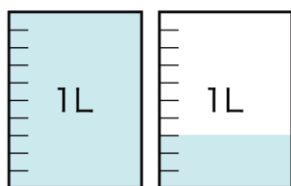
( ) L ( ) dL

②



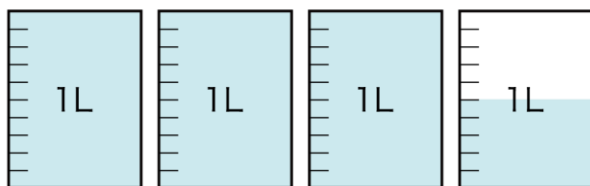
( ) L ( ) dL

③



( ) L ( ) dL

④



( ) L ( ) dL